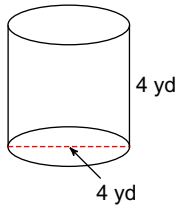


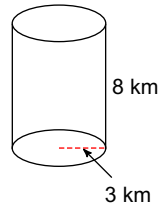
Assignment

Find the surface area of each figure. Round to the nearest tenth.

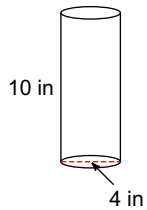
1)



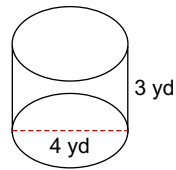
2)



3)

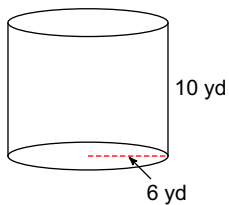


4)

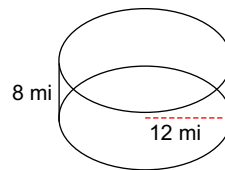


Find the volume of each figure. Round to the nearest tenth.

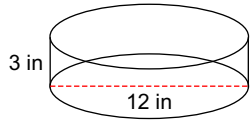
5)



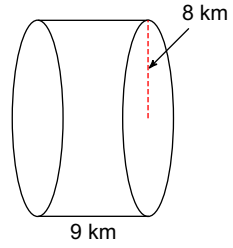
6)



7)

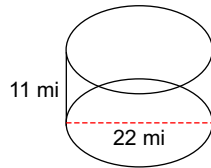


8)

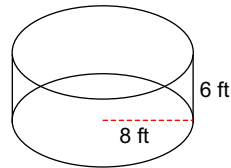


Find the area of just the base shape. Round to the nearest tenth.

9)

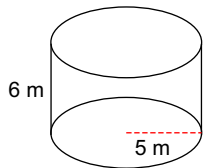


10)



Find the area of just the rectangular shape shape. Round to the nearest tenth.

11)



12)

